

Name \_\_\_\_\_

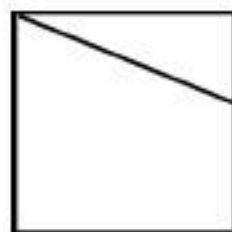
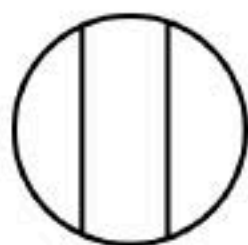

© Miss Giraffe



# equal shares

If the fraction has equal shares, write **equal**.

If the shares are not equal, write **not equal**.



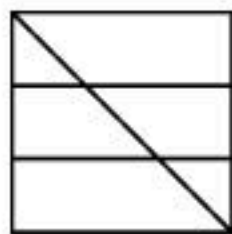


\_\_\_\_\_

\_\_\_\_\_

\_\_\_\_\_

\_\_\_\_\_



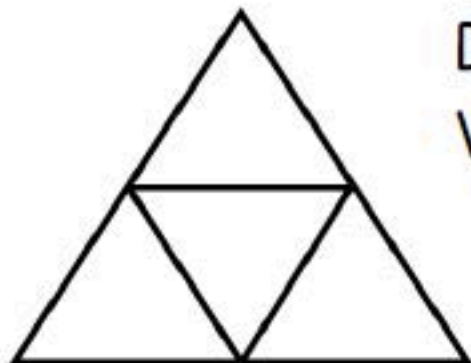
\_\_\_\_\_

\_\_\_\_\_

\_\_\_\_\_

\_\_\_\_\_

## Challenge:



Does this shape have equal shares?

Why or why not? \_\_\_\_\_

\_\_\_\_\_

\_\_\_\_\_

This was:    Easy    Just Right    Hard  
(Circle one)