

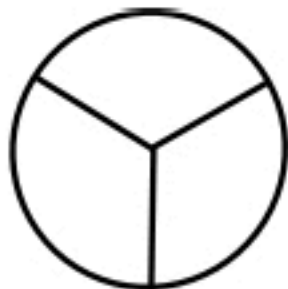
Name _____



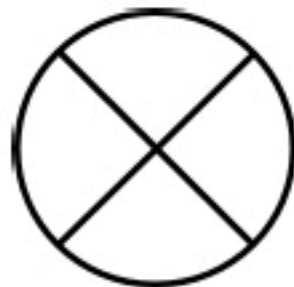
fractions

Color in the shapes to show each fraction.

$\frac{1}{3}$



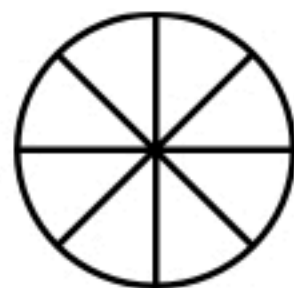
$\frac{2}{4}$



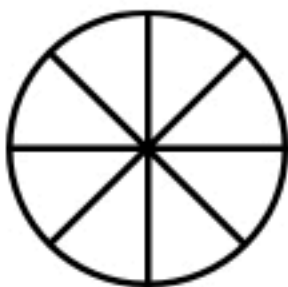
$\frac{2}{5}$



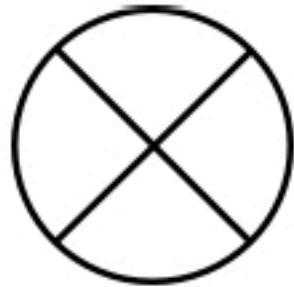
$\frac{3}{8}$



$\frac{1}{8}$



$\frac{1}{4}$



$\frac{4}{6}$



$\frac{3}{5}$



This was:
(Circle one)

Easy

Just Right

Hard

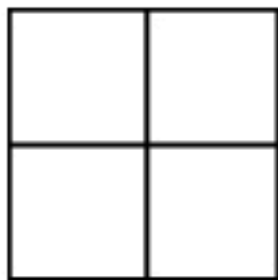
Name _____




fractions

Color in the shapes to show each fraction.


$\frac{2}{4}$




$\frac{1}{2}$



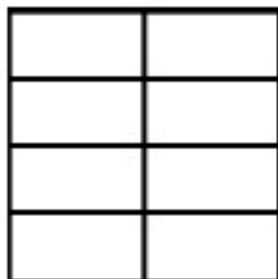
$\frac{1}{5}$




$\frac{3}{5}$



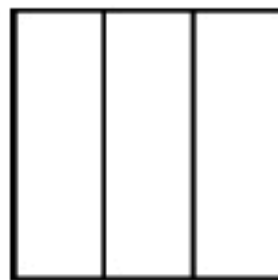
$\frac{2}{8}$



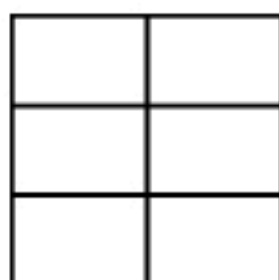
$\frac{2}{3}$



$\frac{1}{3}$



$\frac{4}{6}$



This was: Easy

Just Right

Hard

(Circle one)