
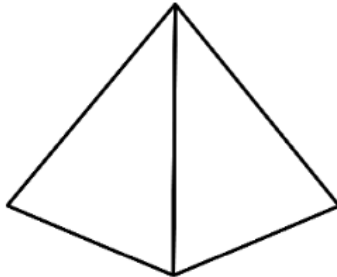
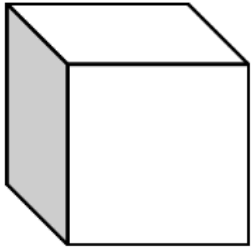



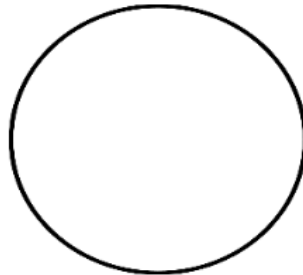
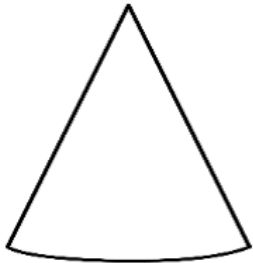
Name _____



3D SHAPES

Write the name of each shape.





Word Bank

pyramid
rectangular prism
cylinder
cone
sphere
cube

Challenge:

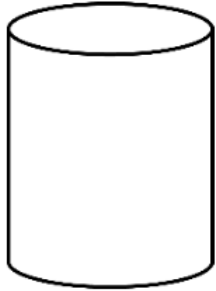
Which shape is the only shape that can roll, stack, and slide?

Name _____



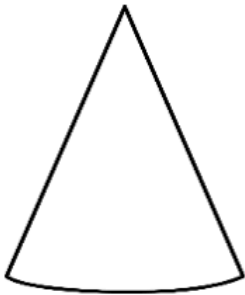
3D SHAPES

Answer the questions about each shape.



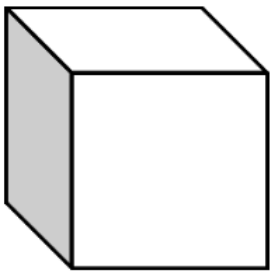
___ faces
___ edges
___ vertices

Can it roll? _____
Can it stack? _____
Can it slide? _____




___ faces
___ edges
___ vertices

Can it roll? _____
Can it stack? _____
Can it slide? _____



___ faces
___ edges
___ vertices

Can it roll? _____
Can it stack? _____
Can it slide? _____



___ faces
___ edges
___ vertices

Can it roll? _____
Can it stack? _____
Can it slide? _____

This was:
(Circle one)

Easy

Just Right

Hard